



(一) 選擇題：單選題，每題 5 分。

1. The probability of stock A rising is 0.3 and of stock B rising is 0.4. What is the probability that neither of the stocks rise, assuming that these two stocks are independent?
(A) 0.42 (B) 0.88 (C) 0.12 (D) 0.44 (E) 0.70
2. A car gets involved in an accident 80% of the time if it is defective. If it is not defective, the probability reduces to 40%. 30% of all cars are defective. If a car is involved in an accident, what is the probability that it was defective?
(A) 0.32 (B) 0.24 (C) 0.0343 (D) 0.12 (E) 0.4615
3. Suppose that the probability of A is 0.7 and the probability of B is 0.4 and we know that the probability that both A and B will occur is 0.28. Then the two events are
(A) Unrelated to each other (B) Mutually exclusive (C) Independent
(D) Dependent (E) Unable to occur at the same time
4. When two fair six-sided die are tossed, what is the expected value of the sum of the faces?
(A) 6 (B) 7 (C) 5 (D) 4 (E) 12
5. What is the probability that at least two cars will cross a given intersection in the next half hour, if crossings are Poisson-distributed with an average of eight cars per hour?
(A) 0.9084 (B) 0.0916 (C) 0.1465 (D) 0.8535 (E) None of the above
6. The temperature in a southern Florida city has a uniform distribution with a range from 78 degrees to 95 degrees. What is the mean of this distribution?
(A) 17 (B) 86.5 (C) 95 (D) 84.5 (E) 78
7. If the variance of random variable X is greater than the variance of random variable Y, then:
(A) The mean of X must be greater than the mean of Y
(B) The median of X must be equal to the median of Y
(C) The probability that X is equal to Y is zero
(D) The standard deviation of X is greater than the standard deviation of Y
(E) All of the above are true
8. The contents of a particular bottle of shampoo marked as 150 ml are found to be 153 ml at an average, with a standard deviation of 2.5 ml. What proportion of shampoo bottles contain less than the marked quantity? Assume a normal distribution.
(A) 0.2192 (B) 0.4452 (C) 0.1151 (D) 0.0548 (E) None of the above



9. All of the following are characteristics of the normal distribution, except:
- (A) Symmetric about the mean
 (B) Bell-shaped curve
 (C) Total area under the curve is always one
 (D) It is a discrete distribution
 (E) Probability that x is equal to any specific value is zero
10. Suppose that an instructor gives an exam. This instructor wants to give those students in the top 2.5% an A on this exam. What will the cutoff be for an A, if the average score on this exam is 80, with a standard deviation of 5?
- (A) About 80 (B) About 90 (C) About 85 (D) About 86 (E) None of the above

(二) 計算題：Problems (50%)

1. (15%) Let X equal the number of telephone calls per five-minute period that are received at Pizza Hut store in the evening. Assume that the distribution of X is Poisson with mean λ .
- (a) Given n observations of X , find the method of moments estimate of λ .
 (b) Given a point estimate of λ using the following 12 observations of X :
 1, 2, 1, 1, 2, 4, 0, 1, 0, 1, 1, 0
 (c) Compare the values of \bar{x} and s^2 . Does this information support the assumption that X has a Poisson distribution.
2. (20%) Regression methods were used to analyze the data from a study investigating the relationship between roadway surface temperature (x) and pavement deflection (y). Summary quantities were $n = 20$, $\sum y_i = 12.75$, $\sum y_i^2 = 8.86$, $\sum x_i = 1478$, $\sum x_i^2 = 143215.8$, and $\sum x_i y_i = 1083.67$.
- (a) Calculate the least square estimates of the slope (β_1) and intercept (β_0).
 (b) Test the hypothesis $H_0 : \beta_1 = 0$ versus $H_1 : \beta_1 \neq 0$ using the analysis of variance procedure with $\alpha = 0.01$.
 (c) Calculate the coefficient of determination.
 (d) Calculate the sample correlation coefficient.



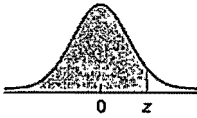
3. (15%) A manager believes that the shelf life of apple juice is normally distributed. A sample of 30 containers of juice was taken and the shelf life was recorded. You are given the results below. The average shelf life in the sample was 23.07 days with a standard deviation of 4.29 days.

15	17	19	20	20	20	21	21	21	21
21	21	21	22	22	22	22	22	22	22
24	24	25	25	27	29	30	31	32	33

- (a) State the null and alternative hypotheses.
- (b) Compute the test statistic for the goodness of fit test.
- (c) At 95% confidence using the p -value approach, test the hypotheses. What do you conclude about the distribution?



TABLE II (cont.)
Areas under the
standard normal curve



z	Second decimal place in z									
	0.00	0.01	0.02	0.03	0.04	0.05	0.06	0.07	0.08	0.09
0.0	0.5000	0.5040	0.5080	0.5120	0.5160	0.5199	0.5239	0.5279	0.5319	0.5359
0.1	0.5398	0.5438	0.5478	0.5517	0.5557	0.5596	0.5636	0.5675	0.5714	0.5753
0.2	0.5793	0.5832	0.5871	0.5910	0.5948	0.5987	0.6026	0.6064	0.6103	0.6141
0.3	0.6179	0.6217	0.6255	0.6293	0.6331	0.6368	0.6406	0.6443	0.6480	0.6517
0.4	0.6554	0.6591	0.6628	0.6664	0.6700	0.6736	0.6772	0.6808	0.6844	0.6879
0.5	0.6915	0.6950	0.6985	0.7019	0.7054	0.7088	0.7123	0.7157	0.7190	0.7224
0.6	0.7257	0.7291	0.7324	0.7357	0.7389	0.7422	0.7454	0.7486	0.7517	0.7549
0.7	0.7580	0.7611	0.7642	0.7673	0.7704	0.7734	0.7764	0.7794	0.7823	0.7852
0.8	0.7881	0.7910	0.7939	0.7967	0.7995	0.8023	0.8051	0.8078	0.8106	0.8133
0.9	0.8159	0.8186	0.8212	0.8238	0.8264	0.8289	0.8315	0.8340	0.8365	0.8389
1.0	0.8413	0.8438	0.8461	0.8485	0.8508	0.8531	0.8554	0.8577	0.8599	0.8621
1.1	0.8643	0.8665	0.8686	0.8708	0.8729	0.8749	0.8770	0.8790	0.8810	0.8830
1.2	0.8849	0.8869	0.8888	0.8907	0.8925	0.8944	0.8962	0.8980	0.8997	0.9015
1.3	0.9032	0.9049	0.9066	0.9082	0.9099	0.9115	0.9131	0.9147	0.9162	0.9177
1.4	0.9192	0.9207	0.9222	0.9236	0.9251	0.9265	0.9279	0.9292	0.9306	0.9319
1.5	0.9332	0.9345	0.9357	0.9370	0.9382	0.9394	0.9406	0.9418	0.9429	0.9441
1.6	0.9452	0.9463	0.9474	0.9484	0.9495	0.9505	0.9515	0.9525	0.9535	0.9545
1.7	0.9554	0.9564	0.9573	0.9582	0.9591	0.9599	0.9608	0.9616	0.9625	0.9633
1.8	0.9641	0.9649	0.9656	0.9664	0.9671	0.9678	0.9686	0.9693	0.9699	0.9706
1.9	0.9713	0.9719	0.9726	0.9732	0.9738	0.9744	0.9750	0.9756	0.9761	0.9767
2.0	0.9772	0.9778	0.9783	0.9788	0.9793	0.9798	0.9803	0.9808	0.9812	0.9817
2.1	0.9821	0.9826	0.9830	0.9834	0.9838	0.9842	0.9846	0.9850	0.9854	0.9857
2.2	0.9861	0.9864	0.9868	0.9871	0.9875	0.9878	0.9881	0.9884	0.9887	0.9890
2.3	0.9893	0.9896	0.9898	0.9901	0.9904	0.9906	0.9909	0.9911	0.9913	0.9916
2.4	0.9918	0.9920	0.9922	0.9925	0.9927	0.9929	0.9931	0.9932	0.9934	0.9936
2.5	0.9938	0.9940	0.9941	0.9943	0.9945	0.9946	0.9948	0.9949	0.9951	0.9952
2.6	0.9953	0.9955	0.9956	0.9957	0.9959	0.9960	0.9961	0.9962	0.9963	0.9964
2.7	0.9965	0.9966	0.9967	0.9968	0.9969	0.9970	0.9971	0.9972	0.9973	0.9974
2.8	0.9974	0.9975	0.9976	0.9977	0.9977	0.9978	0.9979	0.9979	0.9980	0.9981
2.9	0.9981	0.9982	0.9982	0.9983	0.9984	0.9984	0.9985	0.9985	0.9986	0.9986
3.0	0.9987	0.9987	0.9987	0.9988	0.9988	0.9989	0.9989	0.9989	0.9990	0.9990
3.1	0.9990	0.9991	0.9991	0.9991	0.9992	0.9992	0.9992	0.9992	0.9993	0.9993
3.2	0.9993	0.9993	0.9994	0.9994	0.9994	0.9994	0.9994	0.9995	0.9995	0.9995
3.3	0.9995	0.9995	0.9995	0.9996	0.9996	0.9996	0.9996	0.9996	0.9996	0.9997
3.4	0.9997	0.9997	0.9997	0.9997	0.9997	0.9997	0.9997	0.9997	0.9997	0.9998
3.5	0.9998	0.9998	0.9998	0.9998	0.9998	0.9998	0.9998	0.9998	0.9998	0.9998
3.6	0.9998	0.9998	0.9999	0.9999	0.9999	0.9999	0.9999	0.9999	0.9999	0.9999
3.7	0.9999	0.9999	0.9999	0.9999	0.9999	0.9999	0.9999	0.9999	0.9999	0.9999
3.8	0.9999	0.9999	0.9999	0.9999	0.9999	0.9999	0.9999	0.9999	0.9999	0.9999
3.9	1.0000†									

† For $z \geq 3.90$, the areas are 1.0000 to four decimal places.

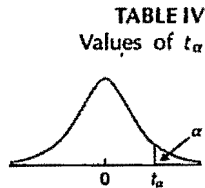


國立雲林科技大學

100 學年度碩士班暨碩士在職專班招生考試試題

系所：運籌所

科目：統計學(2)



df	$t_{0.10}$	$t_{0.05}$	$t_{0.025}$	$t_{0.01}$	$t_{0.005}$	df
1	3.078	6.314	12.706	31.821	63.657	1
2	1.886	2.920	4.303	6.965	9.925	2
3	1.638	2.353	3.182	4.541	5.841	3
4	1.533	2.132	2.776	3.747	4.604	4
5	1.476	2.015	2.571	3.365	4.032	5
6	1.440	1.943	2.447	3.143	3.707	6
7	1.415	1.895	2.365	2.998	3.499	7
8	1.397	1.860	2.306	2.896	3.355	8
9	1.383	1.833	2.262	2.821	3.250	9
10	1.372	1.812	2.228	2.764	3.169	10
11	1.363	1.796	2.201	2.718	3.106	11
12	1.356	1.782	2.179	2.681	3.055	12
13	1.350	1.771	2.160	2.650	3.012	13
14	1.345	1.761	2.145	2.624	2.977	14
15	1.341	1.753	2.131	2.602	2.947	15
16	1.337	1.746	2.120	2.583	2.921	16
17	1.333	1.740	2.110	2.567	2.898	17
18	1.330	1.734	2.101	2.552	2.878	18
19	1.328	1.729	2.093	2.539	2.861	19
20	1.325	1.725	2.086	2.528	2.845	20
21	1.323	1.721	2.080	2.518	2.831	21
22	1.321	1.717	2.074	2.508	2.819	22
23	1.319	1.714	2.069	2.500	2.807	23
24	1.318	1.711	2.064	2.492	2.797	24
25	1.316	1.708	2.060	2.485	2.787	25
26	1.315	1.706	2.056	2.479	2.779	26
27	1.314	1.703	2.052	2.473	2.771	27
28	1.313	1.701	2.048	2.467	2.763	28
29	1.311	1.699	2.045	2.462	2.756	29
30	1.310	1.697	2.042	2.457	2.750	30
31	1.309	1.696	2.040	2.453	2.744	31
32	1.309	1.694	2.037	2.449	2.738	32
33	1.308	1.692	2.035	2.445	2.733	33
34	1.307	1.691	2.032	2.441	2.728	34
35	1.306	1.690	2.030	2.438	2.724	35
36	1.306	1.688	2.028	2.434	2.719	36
37	1.305	1.687	2.026	2.431	2.715	37
38	1.304	1.686	2.024	2.429	2.712	38
39	1.304	1.685	2.023	2.426	2.708	39
40	1.303	1.684	2.021	2.423	2.704	40
41	1.303	1.683	2.020	2.421	2.701	41
42	1.302	1.682	2.018	2.418	2.698	42
43	1.302	1.681	2.017	2.416	2.695	43
44	1.301	1.680	2.015	2.414	2.692	44
45	1.301	1.679	2.014	2.412	2.690	45
46	1.300	1.679	2.013	2.410	2.687	46
47	1.300	1.678	2.012	2.408	2.685	47
48	1.299	1.677	2.011	2.407	2.682	48
49	1.299	1.677	2.010	2.405	2.680	49

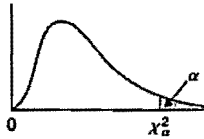


國立雲林科技大學

100 學年度碩士班暨碩士在職專班招生考試試題

系所：運籌所

科目：統計學(2)

TABLE VII
Values of χ^2_{α} 

df	$\chi^2_{0.995}$	$\chi^2_{0.99}$	$\chi^2_{0.975}$	$\chi^2_{0.95}$	$\chi^2_{0.90}$
1	0.000	0.000	0.001	0.004	0.016
2	0.010	0.020	0.051	0.103	0.211
3	0.072	0.115	0.216	0.352	0.584
4	0.207	0.297	0.484	0.711	1.064
5	0.412	0.554	0.831	1.145	1.610
6	0.676	0.872	1.237	1.635	2.204
7	0.989	1.239	1.690	2.167	2.833
8	1.344	1.646	2.180	2.733	3.490
9	1.735	2.088	2.700	3.325	4.168
10	2.156	2.558	3.247	3.940	4.865
11	2.603	3.053	3.816	4.575	5.578
12	3.074	3.571	4.404	5.226	6.304
13	3.565	4.107	5.009	5.892	7.042
14	4.075	4.660	5.629	6.571	7.790
15	4.601	5.229	6.262	7.261	8.547
16	5.142	5.812	6.908	7.962	9.312
17	5.697	6.408	7.564	8.672	10.085
18	6.265	7.015	8.231	9.390	10.865
19	6.844	7.633	8.907	10.117	11.651
20	7.434	8.260	9.591	10.851	12.443
21	8.034	8.897	10.283	11.591	13.240
22	8.643	9.542	10.982	12.338	14.041
23	9.260	10.196	11.689	13.091	14.848
24	9.886	10.856	12.401	13.848	15.659
25	10.520	11.524	13.120	14.611	16.473
26	11.160	12.198	13.844	15.379	17.292
27	11.808	12.879	14.573	16.151	18.114
28	12.461	13.565	15.308	16.928	18.939
29	13.121	14.256	16.047	17.708	19.768
30	13.787	14.953	16.791	18.493	20.599
40	20.707	22.164	24.433	26.509	29.051
50	27.991	29.707	32.357	34.764	37.689
60	35.534	37.485	40.482	43.188	46.459
70	43.275	45.442	48.758	51.739	55.329
80	51.172	53.540	57.153	60.391	64.278
90	59.196	61.754	65.647	69.126	73.291
100	67.328	70.065	74.222	77.930	82.358



國立雲林科技大學

100 學年度碩士班暨碩士在職專班招生考試試題

系所：運籌所

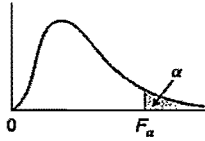
科目：統計學(2)

TABLE VII (cont.)
Values of χ^2_α

$\chi^2_{0.10}$	$\chi^2_{0.05}$	$\chi^2_{0.025}$	$\chi^2_{0.01}$	$\chi^2_{0.005}$	df
2.706	3.841	5.024	6.635	7.879	1
4.605	5.991	7.378	9.210	10.597	2
6.251	7.815	9.348	11.345	12.838	3
7.779	9.488	11.143	13.277	14.860	4
9.236	11.070	12.833	15.086	16.750	5
10.645	12.592	14.449	16.812	18.548	6
12.017	14.067	16.013	18.475	20.278	7
13.362	15.507	17.535	20.090	21.955	8
14.684	16.919	19.023	21.666	23.589	9
15.987	18.307	20.483	23.209	25.188	10
17.275	19.675	21.920	24.725	26.757	11
18.549	21.026	23.337	26.217	28.300	12
19.812	22.362	24.736	27.688	29.819	13
21.064	23.685	26.119	29.141	31.319	14
22.307	24.996	27.488	30.578	32.801	15
23.542	26.296	28.845	32.000	34.267	16
24.769	27.587	30.191	33.409	35.718	17
25.989	28.869	31.526	34.805	37.156	18
27.204	30.143	32.852	36.191	38.582	19
28.412	31.410	34.170	37.566	39.997	20
29.615	32.671	35.479	38.932	41.401	21
30.813	33.924	36.781	40.290	42.796	22
32.007	35.172	38.076	41.638	44.181	23
33.196	36.415	39.364	42.980	45.559	24
34.382	37.653	40.647	44.314	46.928	25
35.563	38.885	41.923	45.642	48.290	26
36.741	40.113	43.195	46.963	49.645	27
37.916	41.337	44.461	48.278	50.994	28
39.087	42.557	45.722	49.588	52.336	29
40.256	43.773	46.979	50.892	53.672	30
51.805	55.759	59.342	63.691	66.767	40
63.167	67.505	71.420	76.154	79.490	50
74.397	79.082	83.298	88.381	91.955	60
85.527	90.531	95.023	100.424	104.213	70
96.578	101.879	106.628	112.328	116.320	80
107.565	113.145	118.135	124.115	128.296	90
118.499	124.343	129.563	135.811	140.177	100



TABLE VIII
Values of F_{α}



dfd	α	dfn								
		1	2	3	4	5	6	7	8	9
1	0.10	39.86	49.50	53.59	55.83	57.24	58.20	58.91	59.44	59.86
	0.05	161.45	199.50	215.71	224.58	230.16	233.99	236.77	238.88	240.54
	0.025	647.79	799.50	864.16	899.58	921.85	937.11	948.22	956.66	963.28
	0.01	4052.2	4999.5	5403.4	5624.6	5763.6	5859.0	5928.4	5981.1	6022.5
	0.005	16211	20000	21615	22500	23056	23437	23715	23925	24091
2	0.10	8.53	9.00	9.16	9.24	9.29	9.33	9.35	9.37	9.38
	0.05	18.51	19.00	19.16	19.25	19.30	19.33	19.35	19.37	19.38
	0.025	38.51	39.00	39.17	39.25	39.30	39.33	39.36	39.37	39.39
	0.01	98.50	99.00	99.17	99.25	99.30	99.33	99.36	99.37	99.39
	0.005	198.50	199.00	199.17	199.25	199.30	199.33	199.36	199.37	199.39
3	0.10	5.54	5.46	5.39	5.34	5.31	5.28	5.27	5.25	5.24
	0.05	10.13	9.55	9.28	9.12	9.01	8.94	8.89	8.85	8.81
	0.025	17.44	16.04	15.44	15.10	14.88	14.73	14.62	14.54	14.47
	0.01	34.12	30.82	29.46	28.71	28.24	27.91	27.67	27.49	27.35
	0.005	55.55	49.80	47.47	46.19	45.39	44.84	44.43	44.13	43.88
4	0.10	4.54	4.32	4.19	4.11	4.05	4.01	3.98	3.95	3.94
	0.05	7.71	6.94	6.59	6.39	6.26	6.16	6.09	6.04	6.00
	0.025	12.22	10.65	9.98	9.60	9.36	9.20	9.07	8.98	8.90
	0.01	21.20	18.00	16.69	15.98	15.52	15.21	14.98	14.80	14.66
	0.005	31.33	26.28	24.26	23.15	22.46	21.97	21.62	21.35	21.14
5	0.10	4.06	3.78	3.62	3.52	3.45	3.40	3.37	3.34	3.32
	0.05	6.61	5.79	5.41	5.19	5.05	4.95	4.88	4.82	4.77
	0.025	10.01	8.43	7.76	7.39	7.15	6.98	6.85	6.76	6.68
	0.01	16.26	13.27	12.06	11.39	10.97	10.67	10.46	10.29	10.16
	0.005	22.78	18.31	16.53	15.56	14.94	14.51	14.20	13.96	13.77
6	0.10	3.78	3.46	3.29	3.18	3.11	3.05	3.01	2.98	2.96
	0.05	5.99	5.14	4.76	4.53	4.39	4.28	4.21	4.15	4.10
	0.025	8.81	7.26	6.60	6.23	5.99	5.82	5.70	5.60	5.52
	0.01	13.75	10.92	9.78	9.15	8.75	8.47	8.26	8.10	7.98
	0.005	18.63	14.54	12.92	12.03	11.46	11.07	10.79	10.57	10.39
7	0.10	3.59	3.26	3.07	2.96	2.88	2.83	2.78	2.75	2.72
	0.05	5.59	4.74	4.35	4.12	3.97	3.87	3.79	3.73	3.68
	0.025	8.07	6.54	5.89	5.52	5.29	5.12	4.99	4.90	4.82
	0.01	12.25	9.55	8.45	7.85	7.46	7.19	6.99	6.84	6.72
	0.005	16.24	12.40	10.88	10.05	9.52	9.16	8.89	8.68	8.51
8	0.10	3.46	3.11	2.92	2.81	2.73	2.67	2.62	2.59	2.56
	0.05	5.32	4.46	4.07	3.84	3.69	3.58	3.50	3.44	3.39
	0.025	7.57	6.06	5.42	5.05	4.82	4.65	4.53	4.43	4.36
	0.01	11.26	8.65	7.59	7.01	6.63	6.37	6.18	6.03	5.91
	0.005	14.69	11.04	9.60	8.81	8.30	7.95	7.69	7.50	7.34