

國立彰化師範大學 97 學年度碩士班招生考試試題

系所： 統計資訊研究所碩士班

科目： 應用統計

☆☆請在答案紙上作答☆☆

共 5 頁，第 1 頁

1. (本題配分 15%)

Sixteen students were divided into two classes of eight each and taught how to solve mathematical problems. One class used the conventional method of learning, and the other class used a new, experimental method. At the end of the courses, each student was given a test that consisted of solving a mathematical problem. The solution was either correct or incorrect, and the results were tabulated as follows.

	Correct Solution	Incorrect Solution
Experimental Class	7	1
Conventional Class	5	3

Is there reason to believe the experimental method is superior? Control the test at 5% level of significance. Please specify the null and alternative hypotheses, the p-value of the test and your conclusion.

2. (本題配分共 30%)

Consider the regression model:

$$Y = \beta_0 + \beta_1 X_1 + \beta_2 X_2 + \beta_3 X_3 + \beta_4 X_4 + \beta_5 X_5 + \varepsilon,$$

The results summarized in the following analysis of variance table:

ANOVA table with sequential sums of squares for five independent variables			ANOVA table with partial sums of squares for five independent variables		
Source of variation	SS	df	Source of variation	SS	df
X_1	78.988	1	$X_1 X_2, X_3, X_4, X_5$	47.085	1
$X_2 X_1$	49.260	1	$X_2 X_1, X_3, X_4, X_5$	5.011	1
$X_3 X_1, X_2$	528.023	1	$X_3 X_1, X_2, X_4, X_5$	267.469	1
$X_4 X_1, X_2, X_3$	3.578	1	$X_4 X_1, X_2, X_3, X_5$	0.905	1
$X_5 X_1, X_2, X_3, X_4$	36.204	1	$X_5 X_1, X_2, X_3, X_4$	36.204	1

(a) Complete the following ANOVA table. (14%)

Source of variation	SS	df	MS	F-value
Regression	(1)	(3)	(5)	(7)
Error	155.329	25	(6)	
Total	(2)	(4)		

國立彰化師範大學 97 學年度碩士班招生考試試題

系所： 統計資訊研究所碩士班

科目： 應用統計

☆☆請在答案紙上作答☆☆

共 5 頁，第 2 頁

- (b) What is the adjusted coefficient of multiple determination for the model? (5%)
- (c) Do the explanatory variables X_1 have a statistically significant effect on the response Y ? Control the test at 5% level of significance. (5%)
- (d) Do the two explanatory variables X_4 and X_5 (consider together) have a statistically significant effect on the response Y ? Control the test at 5% level of significance. (6%)

3. (本題配分共 30%)

An industrial engineer is conducting an experiment on eye focus time. He is interested in the effect of the distance of the object from the eye on the focus time. Three different distances are of interest. He has four subjects available. Because there may be differences among individuals, he decides to conduct the experiment in a randomized complete block design. The data are shown here.

Distance (ft)	Subject			
	1	2	3	4
4	6	6	6	5
7	6	5	1	2
10	3	2	1	2

- (a) Explain the randomized complete block design and state its assumptions underlying the analysis of variance? (5%)
- (b) Is there an difference in eye focus time due to the distance of the object from the eye? Please specify the null and alternative hypotheses, the test used, the distribution of the testing statistic and your conclusion. Use $\alpha = 0.05$. (10%)
- (c) Estimate the overall mean and treatment effects. (5%)
- (d) Test all pairs of treatment means using Bonferroni method, with $\alpha = 0.05$. (10%)

4. (本題配分共 25%)

An economist wished to relate the speed with which a particular insurance innovation is adopted to the size of the insurance firm and the type of firm. The dependent variable is measured by the number of months elapsed (Y). The first independent variable (X_1), size of firm, is quantitative, and the second (X_2), type of firm, is qualitative and is composed of two types (stock companies and mutual companies). Consider the following regression model:

$$Y = \beta_0 + \beta_1 X_1 + \beta_2 X_2 + \varepsilon, \quad (\text{Model 1})$$

國立彰化師範大學 97 學年度碩士班招生考試試題

系所： 統計資訊研究所碩士班

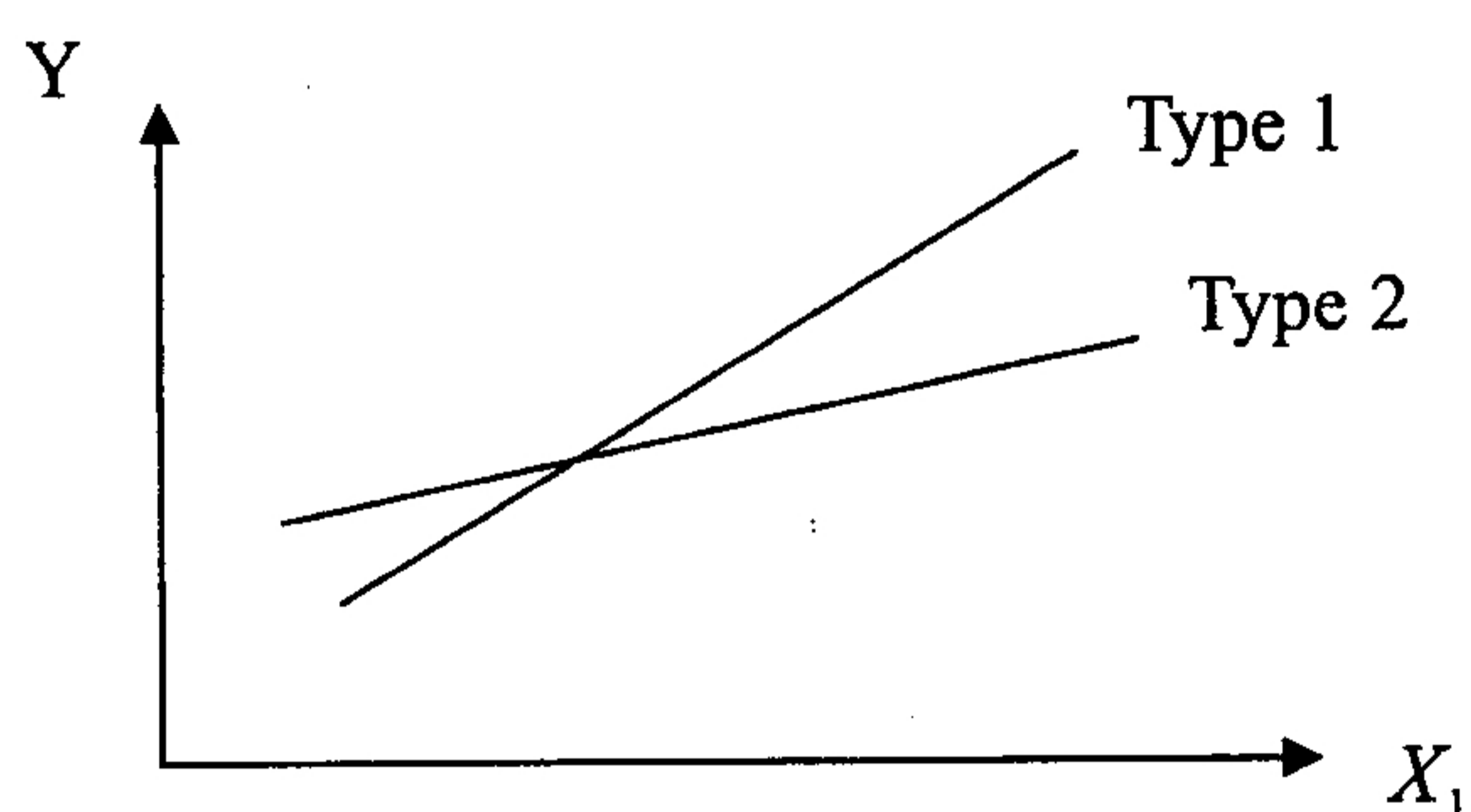
科目： 應用統計

☆☆請在答案紙上作答☆☆

共 5 頁，第 3 頁

- (a) How do you code the second independent variable (X_2)? (5%)
- (b) If the regression function is shown in Figure 1, how do you modify the Model 1 and what effect is indicated by Figure 1? (10%)

Figure 1:

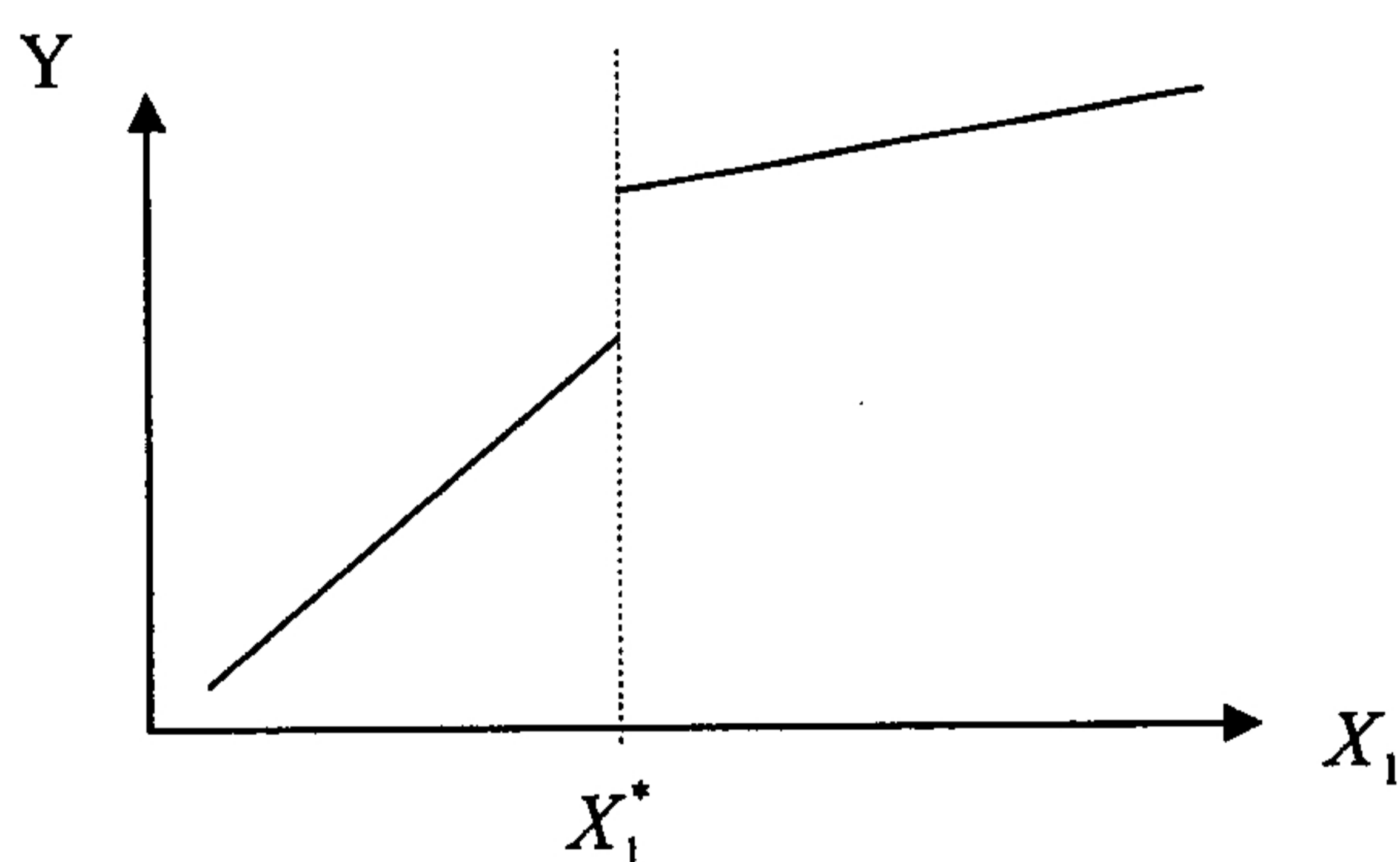


- (c) Now we fit the regression model to this data with only one independent variable (X_1), then the regression model becomes

$$Y = \beta_0 + \beta_1 X_1 + \varepsilon, \quad (\text{Model 2})$$

- If the regression function is shown in Figure 2, how do you modify the Model 2? (10%)

Figure 2:



國立彰化師範大學 97 學年度碩士班招生考試試題

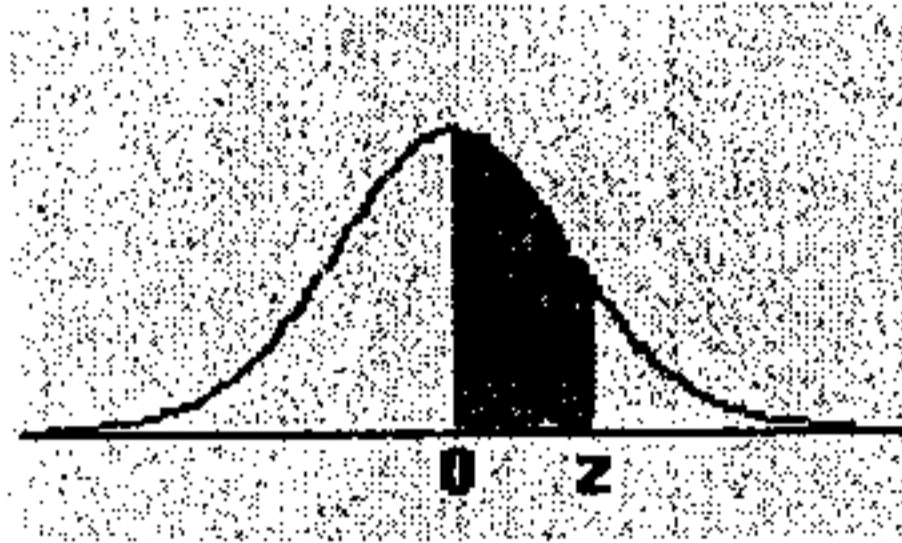
系所： 統計資訊研究所碩士班

科目： 應用統計

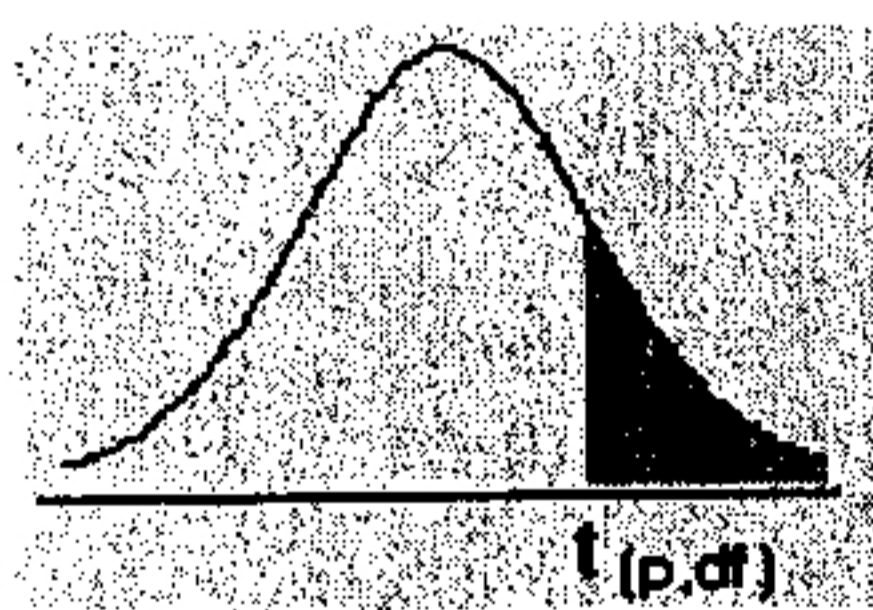
☆☆請在答案紙上作答☆☆

共 5 頁，第 4 頁

附表：



z	0.00	0.01	0.02	0.03	0.04	0.05	0.06	0.07	0.08	0.09
0.0	0.0000	0.0040	0.0080	0.0120	0.0160	0.0199	0.0239	0.0279	0.0319	0.0359
0.1	0.0398	0.0438	0.0478	0.0517	0.0557	0.0596	0.0636	0.0675	0.0714	0.0753
0.2	0.0793	0.0832	0.0871	0.0910	0.0948	0.0987	0.1026	0.1064	0.1103	0.1141
0.3	0.1179	0.1217	0.1255	0.1293	0.1331	0.1368	0.1406	0.1443	0.1480	0.1517
0.4	0.1554	0.1591	0.1628	0.1664	0.1700	0.1736	0.1772	0.1808	0.1844	0.1879
0.5	0.1915	0.1950	0.1985	0.2019	0.2054	0.2088	0.2123	0.2157	0.2190	0.2224
0.6	0.2257	0.2291	0.2324	0.2357	0.2389	0.2422	0.2454	0.2486	0.2517	0.2549
0.7	0.2580	0.2611	0.2642	0.2673	0.2704	0.2734	0.2764	0.2794	0.2823	0.2852
0.8	0.2881	0.2910	0.2939	0.2967	0.2995	0.3023	0.3051	0.3078	0.3106	0.3133
0.9	0.3159	0.3186	0.3212	0.3238	0.3264	0.3289	0.3315	0.3340	0.3365	0.3389
1.0	0.3413	0.3438	0.3461	0.3485	0.3508	0.3531	0.3554	0.3577	0.3599	0.3621
1.1	0.3643	0.3665	0.3686	0.3708	0.3729	0.3749	0.3770	0.3790	0.3810	0.3830
1.2	0.3849	0.3869	0.3888	0.3907	0.3925	0.3944	0.3962	0.3980	0.3997	0.4015
1.3	0.4032	0.4049	0.4066	0.4082	0.4099	0.4115	0.4131	0.4147	0.4162	0.4177
1.4	0.4192	0.4207	0.4222	0.4236	0.4251	0.4265	0.4279	0.4292	0.4306	0.4319
1.5	0.4332	0.4345	0.4357	0.4370	0.4382	0.4394	0.4406	0.4418	0.4429	0.4441
1.6	0.4452	0.4463	0.4474	0.4484	0.4495	0.4505	0.4515	0.4525	0.4535	0.4545
1.7	0.4554	0.4564	0.4573	0.4582	0.4591	0.4599	0.4608	0.4616	0.4625	0.4633
1.8	0.4641	0.4649	0.4656	0.4664	0.4671	0.4678	0.4686	0.4693	0.4699	0.4706
1.9	0.4713	0.4719	0.4726	0.4732	0.4738	0.4744	0.4750	0.4756	0.4761	0.4767
2.0	0.4772	0.4778	0.4783	0.4788	0.4793	0.4798	0.4803	0.4808	0.4812	0.4817
2.1	0.4821	0.4826	0.4830	0.4834	0.4838	0.4842	0.4846	0.4850	0.4854	0.4857
2.2	0.4861	0.4864	0.4868	0.4871	0.4875	0.4878	0.4881	0.4884	0.4887	0.4890
2.3	0.4893	0.4896	0.4898	0.4901	0.4904	0.4906	0.4909	0.4911	0.4913	0.4916
2.4	0.4918	0.4920	0.4922	0.4925	0.4927	0.4929	0.4931	0.4932	0.4934	0.4936
2.5	0.4938	0.4940	0.4941	0.4943	0.4945	0.4946	0.4948	0.4949	0.4951	0.4952
2.6	0.4953	0.4955	0.4956	0.4957	0.4959	0.4960	0.4961	0.4962	0.4963	0.4964
2.7	0.4965	0.4966	0.4967	0.4968	0.4969	0.4970	0.4971	0.4972	0.4973	0.4974
2.8	0.4974	0.4975	0.4976	0.4977	0.4977	0.4978	0.4979	0.4979	0.4980	0.4981
2.9	0.4981	0.4982	0.4982	0.4983	0.4984	0.4984	0.4985	0.4985	0.4986	0.4986
3.0	0.4987	0.4987	0.4987	0.4988	0.4988	0.4989	0.4989	0.4989	0.4990	0.4990



df\Pr	0.25	0.1	0.05	0.025	0.01	0.005
1	1.000	3.078	6.314	12.706	31.821	63.657
2	0.816	1.886	2.920	4.303	6.965	9.925
3	0.765	1.638	2.353	3.182	4.541	5.841
4	0.741	1.533	2.132	2.776	3.747	4.604
5	0.727	1.476	2.015	2.571	3.365	4.032
6	0.718	1.440	1.943	2.447	3.143	3.707
7	0.711	1.415	1.895	2.365	2.998	3.499
8	0.706	1.397	1.860	2.306	2.896	3.355
9	0.703	1.383	1.833	2.262	2.821	3.250
10	0.700	1.372	1.812	2.228	2.764	3.169
11	0.697	1.363	1.796	2.201	2.718	3.106
12	0.695	1.356	1.782	2.179	2.681	3.055
13	0.694	1.350	1.771	2.160	2.650	3.012
14	0.692	1.345	1.761	2.145	2.624	2.977
15	0.691	1.341	1.753	2.131	2.602	2.947

df\Pr	0.25	0.1	0.05	0.025	0.01	0.005
16	0.690	1.337	1.746	2.120	2.583	2.921
17	0.689	1.333	1.740	2.110	2.567	2.898
18	0.688	1.330	1.734	2.101	2.552	2.878
19	0.688	1.328	1.729	2.093	2.539	2.861
20	0.687	1.325	1.725	2.086	2.528	2.845
21	0.686	1.323	1.721	2.080	2.518	2.831
22	0.686	1.321	1.717	2.074	2.508	2.819
23	0.685	1.319	1.714	2.069	2.500	2.807
24	0.685	1.318	1.711	2.064	2.492	2.797
25	0.684	1.316	1.708	2.060	2.485	2.787
26	0.684	1.315	1.706	2.056	2.479	2.779
27	0.684	1.314	1.703	2.052	2.473	2.771
28	0.683	1.313	1.701	2.048	2.467	2.763
29	0.683	1.311	1.699	2.045	2.462	2.756
30	0.683	1.310	1.697	2.042	2.457	2.750
inf	0.674	1.282	1.645	1.960	2.326	2.576

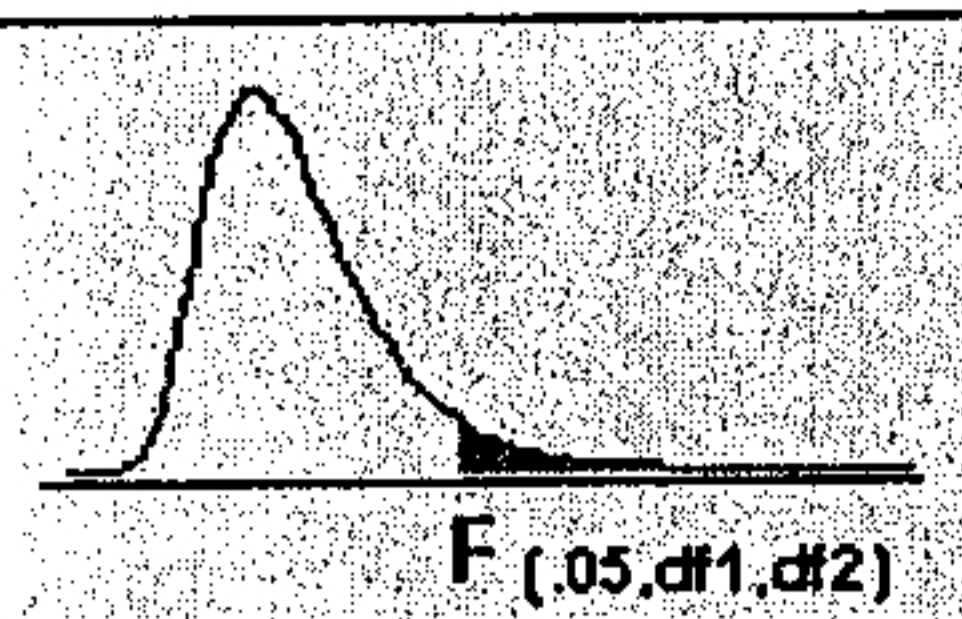
國立彰化師範大學 97 學年度碩士班招生考試試題

系所： 統計資訊研究所碩士班

科目： 應用統計

☆☆請在答案紙上作答☆☆

共 5 頁，第 5 頁



df2/df1	1	2	3	4	5	6	7	8	9	10
1	161.45	199.50	215.71	224.58	230.16	233.99	236.77	238.88	240.54	241.88
2	18.51	19.00	19.16	19.25	19.30	19.33	19.35	19.37	19.38	19.40
3	10.13	9.55	9.28	9.12	9.01	8.94	8.89	8.85	8.81	8.79
4	7.71	6.94	6.59	6.39	6.26	6.16	6.09	6.04	6.00	5.96
5	6.61	5.79	5.41	5.19	5.05	4.95	4.88	4.82	4.77	4.74
6	5.99	5.14	4.76	4.53	4.39	4.28	4.21	4.15	4.10	4.06
7	5.59	4.74	4.35	4.12	3.97	3.87	3.79	3.73	3.68	3.64
8	5.32	4.46	4.07	3.84	3.69	3.58	3.50	3.44	3.39	3.35
9	5.12	4.26	3.86	3.63	3.48	3.37	3.29	3.23	3.18	3.14
10	4.96	4.10	3.71	3.48	3.33	3.22	3.14	3.07	3.02	2.98
11	4.84	3.98	3.59	3.36	3.20	3.09	3.01	2.95	2.90	2.85
12	4.75	3.89	3.49	3.26	3.11	3.00	2.91	2.85	2.80	2.75
13	4.67	3.81	3.41	3.18	3.03	2.92	2.83	2.77	2.71	2.67
14	4.60	3.74	3.34	3.11	2.96	2.85	2.76	2.70	2.65	2.60
15	4.54	3.68	3.29	3.06	2.90	2.79	2.71	2.64	2.59	2.54
16	4.49	3.63	3.24	3.01	2.85	2.74	2.66	2.59	2.54	2.49
17	4.45	3.59	3.20	2.96	2.81	2.70	2.61	2.55	2.49	2.45
18	4.41	3.55	3.16	2.93	2.77	2.66	2.58	2.51	2.46	2.41
19	4.38	3.52	3.13	2.90	2.74	2.63	2.54	2.48	2.42	2.38
20	4.35	3.49	3.10	2.87	2.71	2.60	2.51	2.45	2.39	2.35
21	4.32	3.47	3.07	2.84	2.68	2.57	2.49	2.42	2.37	2.32
22	4.30	3.44	3.05	2.82	2.66	2.55	2.46	2.40	2.34	2.30
23	4.28	3.42	3.03	2.80	2.64	2.53	2.44	2.37	2.32	2.27
24	4.26	3.40	3.01	2.78	2.62	2.51	2.42	2.36	2.30	2.25
25	4.24	3.39	2.99	2.76	2.60	2.49	2.40	2.34	2.28	2.24
26	4.23	3.37	2.98	2.74	2.59	2.47	2.39	2.32	2.27	2.22
27	4.21	3.35	2.96	2.73	2.57	2.46	2.37	2.31	2.25	2.20
28	4.20	3.34	2.95	2.71	2.56	2.45	2.36	2.29	2.24	2.19
29	4.18	3.33	2.93	2.70	2.55	2.43	2.35	2.28	2.22	2.18