

國立高雄第一科技大學 97 學年度 碩士班 招生考試 試題紙

系 所 別：運籌管理系

組 別：一般管理組、工業管理組
運輸管理組、物流資訊組

考科代碼：3111、3121、3131、3141

考 科：統計學

注意事項：

- 1、本科目可使用本校提供之電子計算器。
- 2、請於答案卷上規定之範圍作答，違者該題不予計分。

Answering following questions:

1. In 2005, the average age of students at NKFUST was 22 with a standard deviation of 3.96. In 2006, the average age was 24 with a standard deviation of 4.08. In which year do the ages show a more dispersed distribution? (5 points) You must show your complete work to support your answer.
2. Assume you have applied for two MBA programs, one for NKFUST (F) and another one for NUK (K). The probability that you are accepted by NUK is 0.18. The probability of being accepted by both programs is 0.11. The probability of getting accepted by at least one of the programs is 0.3.
 - a. What is the probability that you will be accepted by NKFUST? (5 points)
 - b. Are events F and K mutually exclusive or independent? (5 points) Please explain.
 - c. What is the probability of being accepted by NUK given that you have been accepted by NKFUST? (5 points)
3. 35 percent of the students who enroll in a simulation course go to the simulation laboratory on a regular basis. Past data indicates that 40% of those students who use the lab on a regular basis make a grade of 80 or better. On the other hand, 10% of students who do not go to the lab on a regular basis make a grade of 80 or better. If a particular student had a final grade of 85, determine the probability that she or he used the lab on a regular basis. (5 points)

4. The length of time patients must wait to see one popular doctor in a local clinic is uniformly distributed between 20 minutes and 2 hours.
- What is the probability of a patient waiting exactly 50 minutes? (5 points)
 - What is the probability that a patient would have to wait between 10 minutes and 1.5 hours? (5 points)
5. On the average, 6.7 cars arrive at the drive-through window of a nearby McDonald every hour.
- Compute the probability that exactly 5 cars will arrive in the next hour. (5 points)
 - Compute the probability that no more than 5 cars will arrive in the next two hours. (5 points)
6. A retailer of electronic equipment received six Wiis from the importer. Three of the Wiis were damaged in the shipment. The retailer sold two Wiis to two customers. What is the probability that both customers received damaged Wiis? (5 points)
7. A veterinarian wishes to estimate the mean blood sugar level of dogs injected with a specified dosage of adrenaline. A sample of 55 dogs is injected, and their blood sugar measurements are recorded in units of milligrams per 100 milliliters of blood. The mean and standard deviation of these measurements are found to be 126.9 and 10.5, respectively.
- Give a point estimate of the population mean (2 points) and a 95.4% error margin (5 points).
 - Determine a 90% confidence interval for the population mean (5 points).
8. A student collected a random sample of 15 observations and computed the sample mean $\bar{x} = 182$ and sample standard deviation $s = 12$.
- Let μ be the population mean. Test $H_0: \mu = 190$ versus $H_1: \mu < 190$ at $\alpha = 0.05$ (5 points).
State your assumption about the population distribution (2 points).
 - What can he say about the P-value of the test statistic calculated in part a? (5 points)

9. The human resources department wanted to compare two programs for training workers to perform a skilled job. 20 workers are randomly selected in the experiment. Of these, 10 are selected at random and trained by method 1; the remaining 10 workers are trained by method 2. After completion of training, all the 20 workers are subject to a time-and-motion tests that records the speed of performance of a skilled job. The following data are obtained.

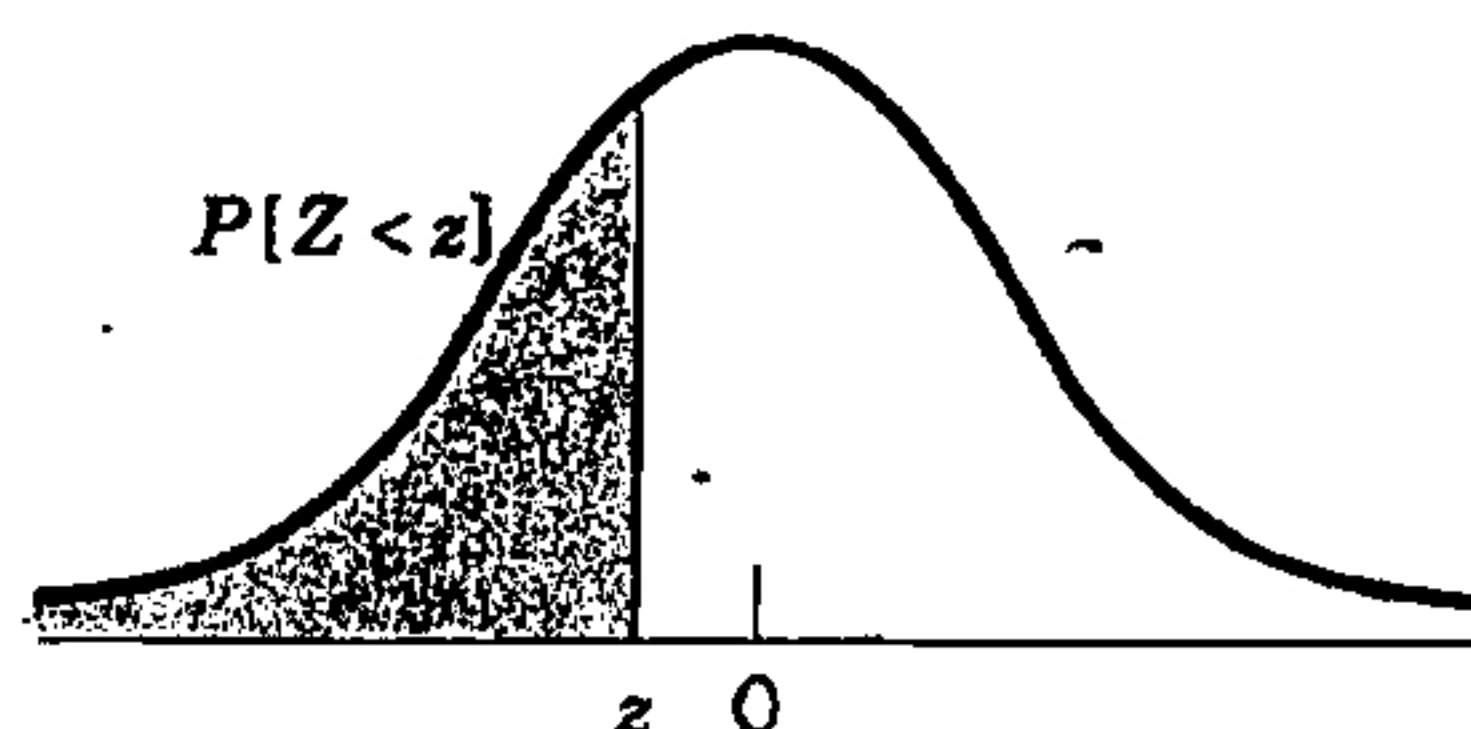
Method	Time (minutes)									
1	15	20	11	23	16	21	18	16	27	24
2	23	31	13	19	23	17	28	26	25	28

- Can you conclude from the data that the mean job time is significantly less after training with method 1 than after training with method 2? (Test with $\alpha = 0.05$) (5 points)
 - State the assumptions you make for the population distribution. (2 points)
 - Construct a 95% confidence interval for the population mean difference in job times between the two methods. (5 points)
10. A student wanted to buy a used car, and found the following used car information with age x (years) and selling price y (thousand of dollars).

x	1	2	2	4	4	5	7	7	8
y	16.9	12.9	13.9	13.0	8.8	8.9	5.6	5.7	6.0

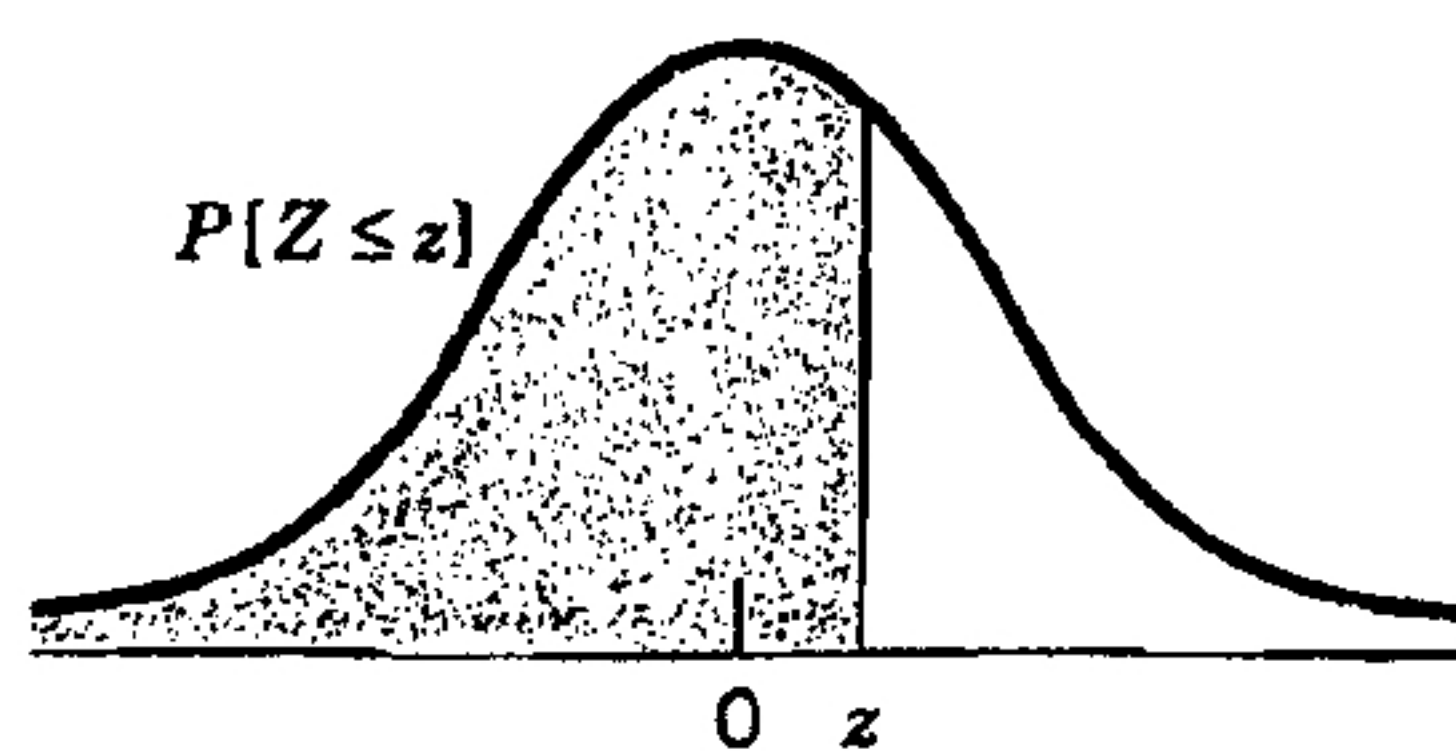
- Determine the equation of the least squares regression line (5 points) and draw this line on the scatter diagram (4 points).
- Construct a 95% confidence interval for the slope of the regression line. (5 points)

TABLE 3 Standard Normal Probabilities



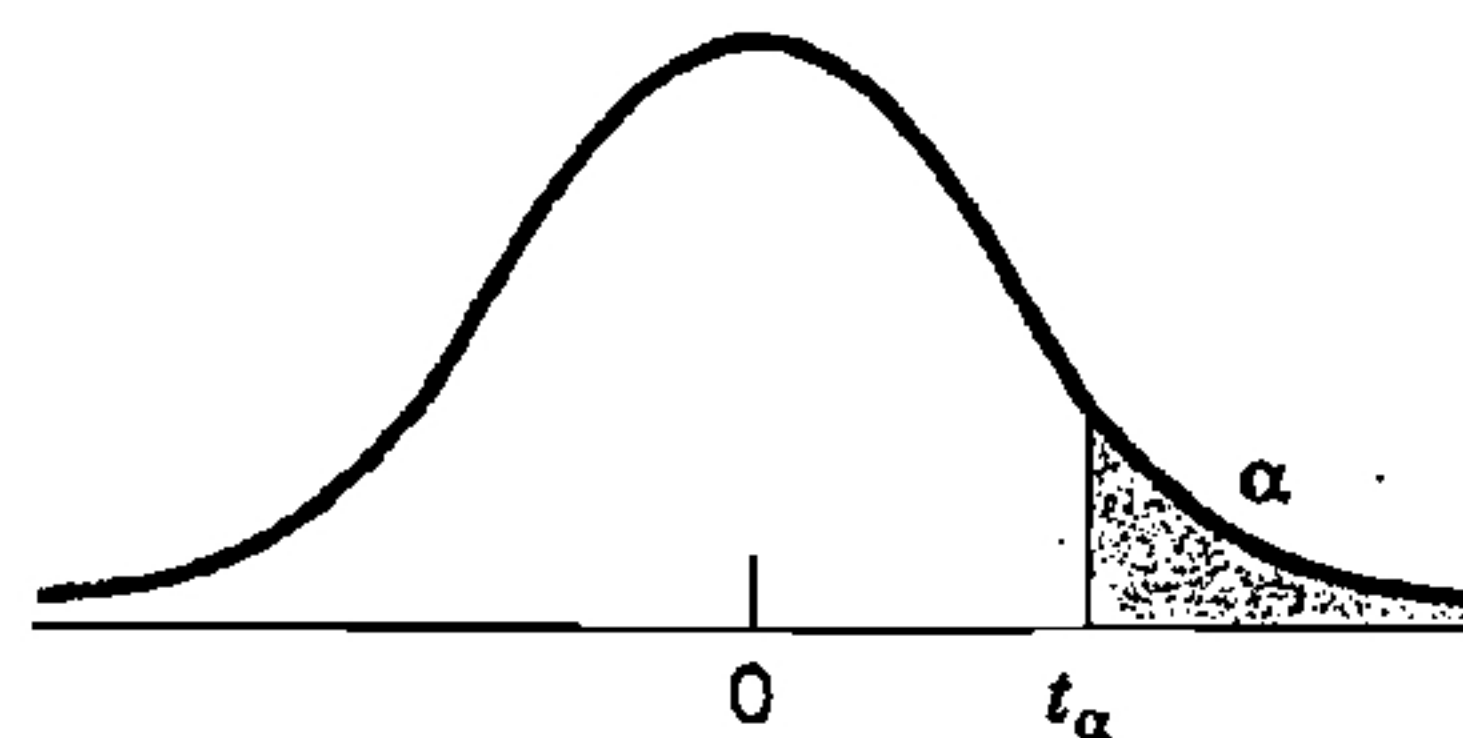
z	.00	.01	.02	.03	.04	.05	.06	.07	.08	.09
-3.5	.0002	.0002	.0002	.0002	.0002	.0002	.0002	.0002	.0002	.0002
-3.4	.0003	.0003	.0003	.0003	.0003	.0003	.0003	.0003	.0003	.0003
-3.3	.0005	.0005	.0005	.0004	.0004	.0004	.0004	.0004	.0004	.0003
-3.2	.0007	.0007	.0006	.0006	.0006	.0006	.0006	.0005	.0005	.0005
-3.1	.0010	.0009	.0009	.0009	.0008	.0008	.0008	.0008	.0007	.0007
-3.0	.0013	.0013	.0013	.0012	.0012	.0011	.0011	.0011	.0010	.0010
-2.9	.0019	.0018	.0018	.0017	.0016	.0016	.0015	.0015	.0014	.0014
-2.8	.0026	.0025	.0024	.0023	.0023	.0022	.0021	.0021	.0020	.0019
-2.7	.0035	.0034	.0033	.0032	.0031	.0030	.0029	.0028	.0027	.0026
-2.6	.0047	.0045	.0044	.0043	.0041	.0040	.0039	.0038	.0037	.0036
-2.5	.0062	.0060	.0059	.0057	.0055	.0054	.0052	.0051	.0049	.0048
-2.4	.0082	.0080	.0078	.0075	.0073	.0071	.0069	.0068	.0066	.0064
-2.3	.0107	.0104	.0102	.0099	.0096	.0094	.0091	.0089	.0087	.0084
-2.2	.0139	.0136	.0132	.0129	.0125	.0122	.0119	.0116	.0113	.0110
-2.1	.0179	.0174	.0170	.0166	.0162	.0158	.0154	.0150	.0146	.0143
-2.0	.0228	.0222	.0217	.0212	.0207	.0202	.0197	.0192	.0188	.0183
-1.9	.0287	.0281	.0274	.0268	.0262	.0256	.0250	.0244	.0239	.0233
-1.8	.0359	.0351	.0344	.0336	.0329	.0322	.0314	.0307	.0301	.0294
-1.7	.0446	.0436	.0427	.0418	.0409	.0401	.0392	.0384	.0375	.0367
-1.6	.0548	.0537	.0526	.0516	.0505	.0495	.0485	.0475	.0465	.0455
-1.5	.0668	.0655	.0643	.0630	.0618	.0606	.0594	.0582	.0571	.0559
-1.4	.0808	.0793	.0778	.0764	.0749	.0735	.0721	.0708	.0694	.0681
-1.3	.0968	.0951	.0934	.0918	.0901	.0885	.0869	.0853	.0838	.0823
-1.2	.1151	.1131	.1112	.1093	.1075	.1056	.1038	.1020	.1003	.0985
-1.1	.1357	.1335	.1314	.1292	.1271	.1251	.1230	.1210	.1190	.1170
-1.0	.1587	.1562	.1539	.1515	.1492	.1469	.1446	.1423	.1401	.1379
-.9	.1841	.1814	.1788	.1762	.1736	.1711	.1685	.1660	.1635	.1611
-.8	.2119	.2090	.2061	.2033	.2005	.1977	.1949	.1922	.1894	.1867
-.7	.2420	.2389	.2358	.2327	.2297	.2266	.2236	.2206	.2177	.2148
-.6	.2743	.2709	.2676	.2643	.2611	.2578	.2546	.2514	.2483	.2451
-.5	.3085	.3050	.3015	.2981	.2946	.2912	.2877	.2843	.2810	.2776
-.4	.3446	.3409	.3372	.3336	.3300	.3264	.3228	.3192	.3156	.3121
-.3	.3821	.3783	.3745	.3707	.3669	.3632	.3594	.3557	.3520	.3483
-.2	.4207	.4168	.4129	.4090	.4052	.4013	.3974	.3936	.3897	.3859
-.1	.4602	.4562	.4522	.4483	.4443	.4404	.4364	.4325	.4286	.4247
-.0	.5000	.4960	.4920	.4880	.4840	.4801	.4761	.4721	.4681	.4641

TABLE 3 (Continued)



z	.00	.01	.02	.03	.04	.05	.06	.07	.08	.09
.0	.5000	.5040	.5080	.5120	.5160	.5199	.5239	.5279	.5319	.5359
.1	.5398	.5438	.5478	.5517	.5557	.5596	.5636	.5675	.5714	.5753
.2	.5793	.5832	.5871	.5910	.5948	.5987	.6026	.6064	.6103	.6141
.3	.6179	.6217	.6255	.6293	.6331	.6368	.6406	.6443	.6480	.6517
.4	.6554	.6591	.6628	.6664	.6700	.6736	.6772	.6808	.6844	.6879
.5	.6915	.6950	.6985	.7019	.7054	.7088	.7123	.7157	.7190	.7224
.6	.7257	.7291	.7324	.7357	.7389	.7422	.7454	.7486	.7517	.7549
.7	.7580	.7611	.7642	.7673	.7703	.7734	.7764	.7794	.7823	.7852
.8	.7881	.7910	.7939	.7967	.7995	.8023	.8051	.8078	.8106	.8133
.9	.8159	.8186	.8212	.8238	.8264	.8289	.8315	.8340	.8365	.8389
1.0	.8413	.8438	.8461	.8485	.8508	.8531	.8554	.8577	.8599	.8621
1.1	.8643	.8665	.8686	.8708	.8729	.8749	.8770	.8790	.8810	.8830
1.2	.8849	.8869	.8888	.8907	.8925	.8944	.8962	.8980	.8997	.9015
1.3	.9032	.9049	.9066	.9082	.9099	.9115	.9131	.9147	.9162	.9177
1.4	.9192	.9207	.9222	.9236	.9251	.9265	.9279	.9292	.9306	.9319
1.5	.9332	.9345	.9357	.9370	.9382	.9394	.9406	.9418	.9429	.9441
1.6	.9452	.9463	.9474	.9484	.9495	.9505	.9515	.9525	.9535	.9545
1.7	.9554	.9564	.9573	.9582	.9591	.9599	.9608	.9616	.9625	.9633
1.8	.9641	.9649	.9656	.9664	.9671	.9678	.9686	.9693	.9699	.9706
1.9	.9713	.9719	.9726	.9732	.9738	.9744	.9750	.9756	.9761	.9767
2.0	.9772	.9778	.9783	.9788	.9793	.9798	.9803	.9808	.9812	.9817
2.1	.9821	.9826	.9830	.9834	.9838	.9842	.9846	.9850	.9854	.9857
2.2	.9861	.9864	.9868	.9871	.9875	.9878	.9881	.9884	.9887	.9890
2.3	.9893	.9896	.9898	.9901	.9904	.9906	.9909	.9911	.9913	.9916
2.4	.9918	.9920	.9922	.9925	.9927	.9929	.9931	.9932	.9934	.9936
2.5	.9938	.9940	.9941	.9943	.9945	.9946	.9948	.9949	.9951	.9952
2.6	.9953	.9955	.9956	.9957	.9959	.9960	.9961	.9962	.9963	.9964
2.7	.9965	.9966	.9967	.9968	.9969	.9970	.9971	.9972	.9973	.9974
2.8	.9974	.9975	.9976	.9977	.9977	.9978	.9979	.9979	.9980	.9981
2.9	.9981	.9982	.9982	.9983	.9984	.9984	.9985	.9985	.9986	.9986
3.0	.9987	.9987	.9987	.9988	.9988	.9989	.9989	.9989	.9990	.9990
3.1	.9990	.9991	.9991	.9991	.9992	.9992	.9992	.9992	.9993	.9993
3.2	.9993	.9993	.9994	.9994	.9994	.9994	.9994	.9995	.9995	.9995
3.3	.9995	.9995	.9995	.9996	.9996	.9996	.9996	.9996	.9996	.9997
3.4	.9997	.9997	.9997	.9997	.9997	.9997	.9997	.9997	.9997	.9998
3.5	.9998	.9998	.9998	.9998	.9998	.9998	.9998	.9998	.9998	.9998

TABLE 4 Percentage Points of t Distributions



d.f. \ α	.25	.10	.05	.025	.01	.00833	.00625	.005
1	1.000	3.078	6.314	12.706	31.821	38.204	50.923	63.657
2	.816	1.886	2.920	4.303	6.965	7.649	8.860	9.925
3	.765	1.638	2.353	3.182	4.541	4.857	5.392	5.841
4	.741	1.533	2.132	2.776	3.747	3.961	4.315	4.604
5	.727	1.476	2.015	2.571	3.365	3.534	3.810	4.032
6	.718	1.440	1.943	2.447	3.143	3.287	3.521	3.707
7	.711	1.415	1.895	2.365	2.998	3.128	3.335	3.499
8	.706	1.397	1.860	2.306	2.896	3.016	3.206	3.355
9	.703	1.383	1.833	2.262	2.821	2.933	3.111	3.250
10	.700	1.372	1.812	2.228	2.764	2.870	3.038	3.169
11	.697	1.363	1.796	2.201	2.718	2.820	2.981	3.106
12	.695	1.356	1.782	2.179	2.681	2.779	2.934	3.055
13	.694	1.350	1.771	2.160	2.650	2.746	2.896	3.012
14	.692	1.345	1.761	2.145	2.624	2.718	2.864	2.977
15	.691	1.341	1.753	2.131	2.602	2.694	2.837	2.947
16	.690	1.337	1.746	2.120	2.583	2.673	2.813	2.921
17	.689	1.333	1.740	2.110	2.567	2.655	2.793	2.898
18	.688	1.330	1.734	2.101	2.552	2.639	2.775	2.878
19	.688	1.328	1.729	2.093	2.539	2.625	2.759	2.861
20	.687	1.325	1.725	2.086	2.528	2.613	2.744	2.845
21	.686	1.323	1.721	2.080	2.518	2.601	2.732	2.831
22	.686	1.321	1.717	2.074	2.508	2.591	2.720	2.819
23	.685	1.319	1.714	2.069	2.500	2.582	2.710	2.807
24	.685	1.318	1.711	2.064	2.492	2.574	2.700	2.797
25	.684	1.316	1.708	2.060	2.485	2.566	2.692	2.787
26	.684	1.315	1.706	2.056	2.479	2.559	2.684	2.779
27	.684	1.314	1.703	2.052	2.473	2.552	2.676	2.771
28	.683	1.313	1.701	2.048	2.467	2.546	2.669	2.763
29	.683	1.311	1.699	2.045	2.462	2.541	2.663	2.756
30	.683	1.310	1.697	2.042	2.457	2.536	2.657	2.750
40	.681	1.303	1.684	2.021	2.423	2.499	2.616	2.704
60	.679	1.296	1.671	2.000	2.390	2.463	2.575	2.660
120	.677	1.289	1.658	1.980	2.358	2.428	2.536	2.617
∞	.674	1.282	1.645	1.960	2.326	2.394	2.498	2.576